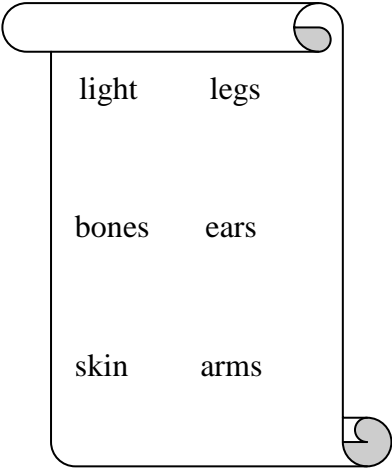


**INDIAN SCHOOL MUSCAT
PRIMARY SECTION**

Subject: EVS Tasksheet	Name :	Roll No.
Lessons : Our Body, Our Sense Organs	Std II _____	DATE:
Resource Person : Ms. Surbhi Marwaha	Teacher's Signature :	

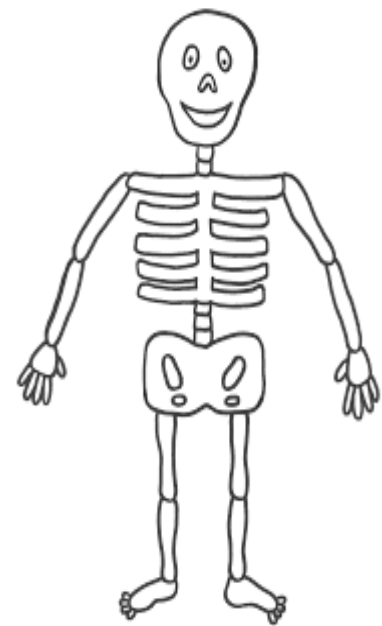
I. Choose the correct answer and fill in the blanks given below.

1. The hard part inside the body are the _____.
2. The _____ is the outermost covering of the body.
3. The lower limbs are called the _____.
4. We are not able to see with our eyes if there is no _____.
5. We hear with our _____.



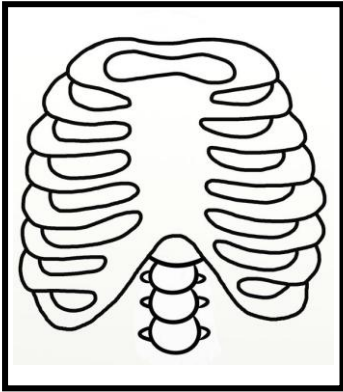
II . Match the following.

- | | |
|----------------------------------|----------------------|
| 1. tongue | a. very pleasant |
| 2. The music is | b. arms |
| 3. The soft part inside the body | c. the soup is tasty |
| 4. Number of bones in our body | d. muscles |
| 5. upper limbs | e. 206 |

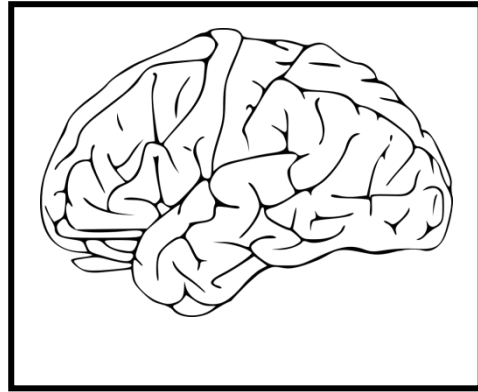


Ans 1 _____ 2 _____ 3 _____ 4 _____ 5 _____

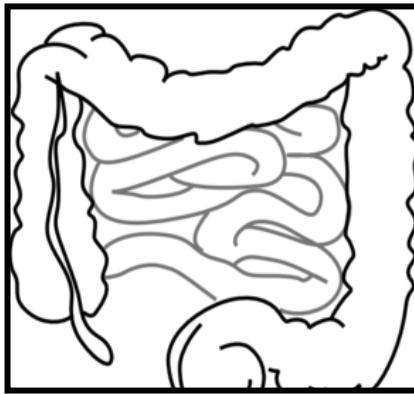
III. Look at the picture of the organ and colour the box with correct name.



ribcage	brain
---------	-------



arm	brain
-----	-------



stomach	intestine
---------	-----------

IV. Name the five sense organs.

Ans _____

